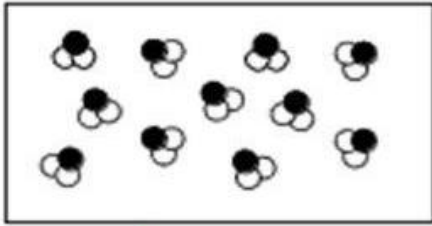



در هر یک از تصاویر داده شده کدام دسته از موادی که در زیر نامبرده شده است را نشان می دهد؟

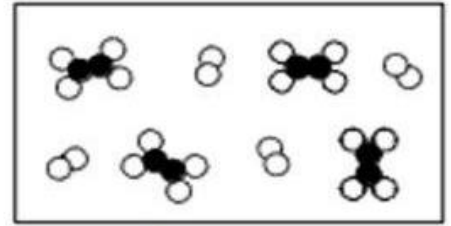
الف) عنصر اتمی      ب) عنصر مولکولی      پ) ترکیب  
 ت) مخلوط از عناصر      ج) مخلوطی از ترکیب ها و عناصر



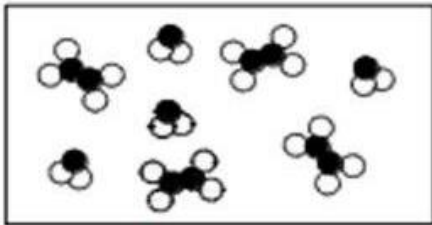
1) \_\_\_\_\_




2) \_\_\_\_\_



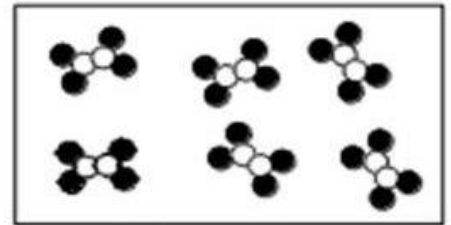
3) \_\_\_\_\_



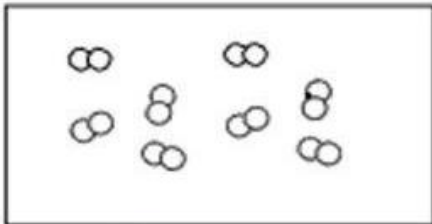
4) \_\_\_\_\_



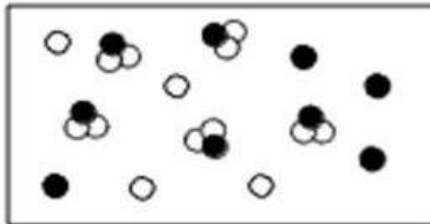
5) \_\_\_\_\_



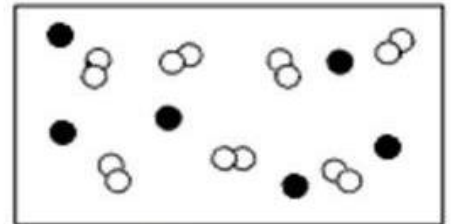
6) \_\_\_\_\_



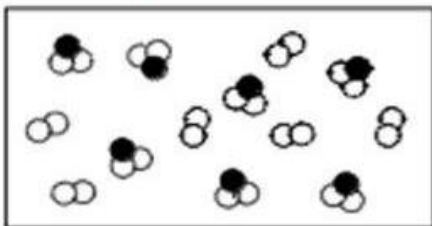
7) \_\_\_\_\_



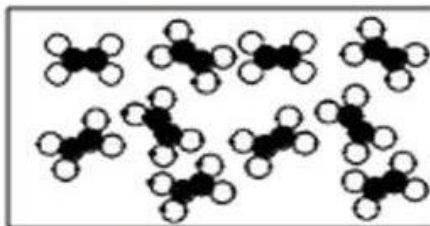
8) \_\_\_\_\_




9) \_\_\_\_\_



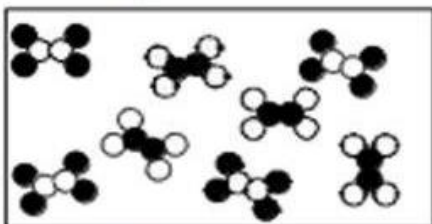
10) \_\_\_\_\_



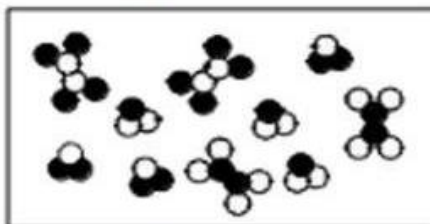
11) \_\_\_\_\_



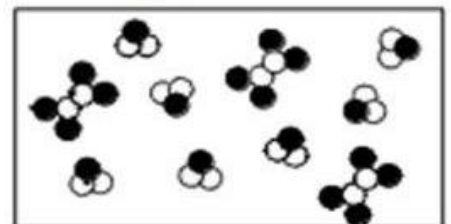
12) \_\_\_\_\_



13) \_\_\_\_\_



14) \_\_\_\_\_



15) \_\_\_\_\_